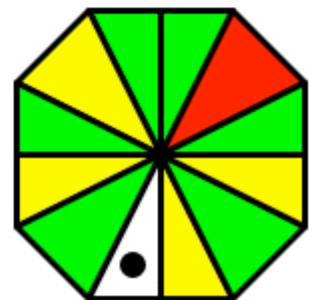
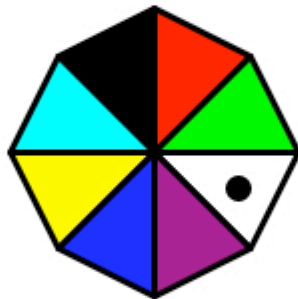
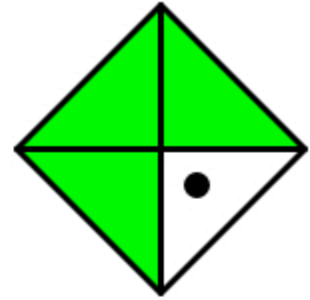



1	2	3
4	5	6
7	8	9

χ ρ ω τ α τ ρ ι χ

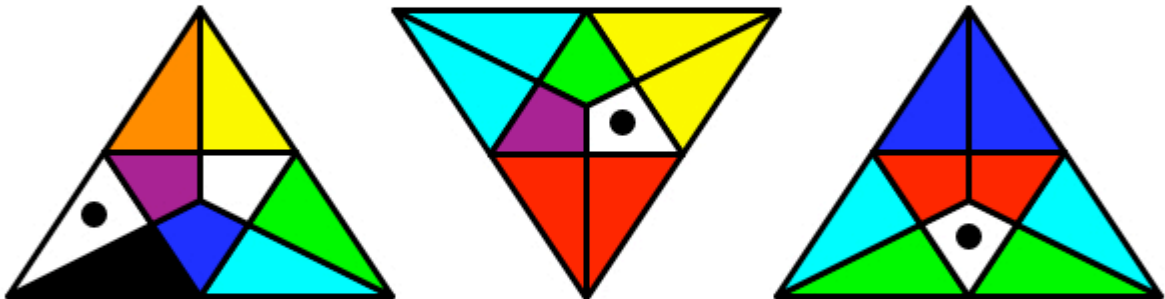
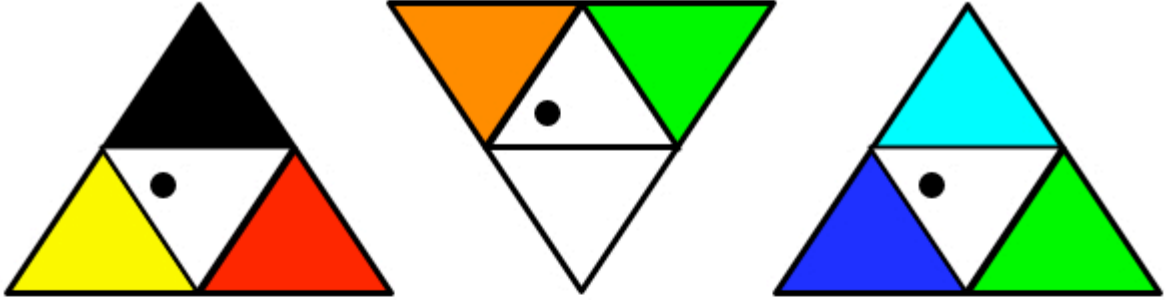
See the Score and Norming Data File at www.psiq.org/lux for the submission instructions and guidelines. Deduce the numerical value for the correct colour (0-8) of the section that is indicated by the black circle.



10	11	12
13	14	15
16	17	18

χ ρ ω τ α τ ρ ι χ

See the Score and Norming Data File at www.psiq.org/lux for the submission instructions and guidelines. Deduce the numerical value for the correct colour (0-8) of the section that is indicated by the black circle.



19	20	21
22	23	24
25	26	27

χ ρ ω τ α τ ρ ι χ

See the Score and Norming Data File at www.psiq.org/lux for the submission instructions and guidelines. Deduce the numerical value for the correct colour (0-8) of the section that is indicated by the black circle.

